



is thrilled to present

Triad: " A Tribute to the Teachers" a Knowledge Fe(a)st

A special event celebrating Teachers' Day with a fun and challenging quiz!



This unique event combines questions from Math, English, and Science, tailored for three age groups:

Group 1 (Grade 1 - 3): **Bright Beginners**

Group 2 (Grade 4 - 6): **Junior Explorers**

Group 3 (Grade 7 - 10): **Rising Stars**

Quiz Dates: September 4 - September 6

How to Participate:

1. Download this Quiz sheet.
2. After completing the quiz, Submit your answers using the following format:

Name	Grade	School	Question Number 1	Question Number 2	Question Number 3	Question Number 4	Question Number 5	Question Number 6

3. You can send your answers by:

sending them through WhatsApp on +91 **98103 36335** or

our email id **exam@internationalolympiadacademy.com**

(or)

Send them to your **school coordinator's email ID.**

Prizes:

- **e-Gold Certificates** for **Perfect Scorers** 🏆
- **Special Prizes** await the **first 100 Perfect Scorers** 🏆
- 🏆 The “ **Fab Teachers Team** “ Award, featuring an **e-Gold Certificate & Trophy**, will be given to the **top 20 schools with the maximum number of perfect scorers** (All India).



MATH KANGAROO
COMPETITION
115+ Countries

FROM FRANCE



HIPPO ENGLISH
OLYMPIAD
60+ Countries

FROM ITALY



INTERNATIONAL
SCIENCE OLYMPIAD
15+ Countries

FROM INDIA

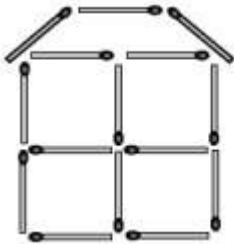
Group 1: Bright Beginners (Grade 1 - 3)

1. Which letter on the board is not in the word "KOALA"?



- a) R
- b) L
- c) K
- d) N

2. Michael built a house with matches as in the picture. How many matches did he use?



- a) 19
- b) 18
- c) 17
- d) 15



3.



Which of the following correctly depicts the picture?

- a) Day
- b) Night
- c) Summer
- d) Winter

4.



How many flower pots are there in this picture?

- a) Two
- b) One
- c) Three
- d) Five



5. What do you know from the given figure?



- a) Living things move.
- b) Living things need food.
- c) Living things grow.
- d) Living things need soil.

6. In the below diagram, the arrow marks represent:

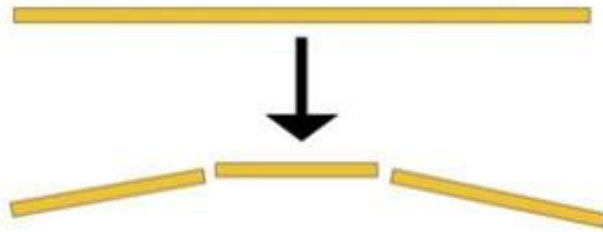


- a) Preparation of food by plants.
- b) Release of oxygen.
- c) Absorption and transportation of water and minerals.
- d) Absorption of sunlight.




Group 2: Rising Stars (Grade 4 - 6)

1. Giulia is playing with spaghetti. Every time she breaks one piece of spaghetti, it becomes 3 pieces. She starts with one piece of spaghetti. Which of the following cannot be the number of pieces after she stops?



- a)13
- b)17
- c)20
- d)25

2. The body mass index BMI of one person is the number got when we divide the person's weight (in kg) by the square of the person's height (in m²). Supposedly, a BMI of 25.0 or more means overweight, while the healthy range is $18.5 < \text{BMI} < 25.0$, for adults from 18 to 65 years old. Joanna made her calculation and got BMI = 30.0. She is 1.60 m tall. After a painful diet, she got exactly BMI = 25.0. What was her weight's loss?



- a) 5.0 kg
- b) 6.2 kg
- c) 9.8 kg
- d) 12.8 kg



3. Reading Passage:

Lily has a pet cat named Whiskers. Every morning, she feeds Whiskers at 7:00 AM. Whiskers likes to eat fish and drink milk. After breakfast, Lily takes Whiskers for a short walk in the garden. Whiskers enjoys playing with a ball and chasing butterflies.

In the afternoon, Lily and Whiskers like to nap together on the couch. In the evening, Lily gives Whiskers some treats and brushes his fur. Before bed, Lily says goodnight to Whiskers and gives him a gentle pat.



Question:

What does Whiskers enjoy doing in the garden?

- a) Digging holes
- b) Playing with a ball and chasing butterflies
- c) Sleeping under a tree
- d) Climbing trees

4. Reading Passage:

Tom and his family visited the zoo last Saturday. They saw many animals, including lions, giraffes, and monkeys. Tom was excited because he had never seen a giraffe up close before.

While they were at the zoo, Tom took pictures of the animals with his camera. His sister, Lucy, enjoyed feeding the goats. They spent the whole day exploring the different animal enclosures and learning about the animals' habitats.

By the time they left the zoo, Tom and Lucy were tired but happy. They talked about their favorite animals during the drive home and planned to visit the zoo again in the future.



Question:

How did Tom feel about seeing the giraffe?

- a) He was bored
- b) He was excited
- c) He was scared
- d) He was indifferent



5. Which one of the following tells us how long the object is?

a)



b)



c)



d)



6. Anil ran 15 km in 2 hours in a marathon. How many kilometers would he run in the next 3 hours if he ran at the same speed?



- a) 30 km
- b) 17.5 km
- c) 45 km
- d) 22.5 km



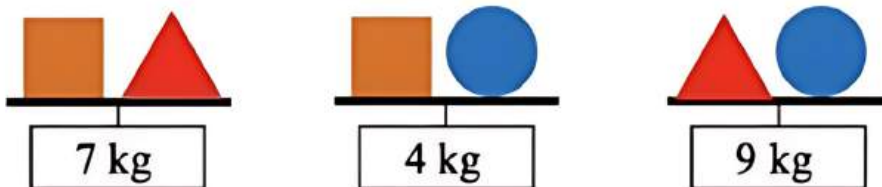
Group 3: Rising Stars (Grade 7 - 10)

1. In a bakery cart were 500 of the same croissants. The full cart was three times as heavy as all of the croissants combined. The full car was also 50 kg heavier than all the croissants. How many grams does one croissant weigh?



- a) 5g
- b) 25 g
- c) 100 g
- d) 50 g

2. Each shape on the given scales has a different mass. What is the total mass of the three shapes?



- a) 10
- b) 11
- c) 13
- d) 20



3. i) Rome is famous for its _____ ancient architecture and historical sites.

ii) Florence is renowned for its _____ and culture.



Rome



Florence

- a) unique / cuisine
- b) impressive / art
- c) modern / history
- d) traditional / music

4. The teacher asked us to _____ our
homework before the end of the week.

- a) forget
- b) submit
- c) discuss
- d) ignore



5. Which of the following statements are true?

- (i) All green plants can prepare their own food.
- (ii) Most animals are autotrophs.
- (iii) Carbon dioxide is not required for photosynthesis.
- (iv) Oxygen is liberated during photosynthesis.



Choose the correct option.


- a) (i) and (iv)
- b) (ii) only
- c) (ii) and (iii)
- d) (i) and (ii)

6. Which of the following is/are not a chamber in the stomach of a ruminant?

- (i) Rumen (ii) Abomasum (iii) Omasum (iv) Canines (v) Globules

Choose the correct option.

- a) (i) and (ii)
- b) (iii) and (iv)
- c) (iv) and (v)
- d) (iv) only



Participate, score perfect, and show your gratitude to your teachers—a perfect tribute to their hard work and dedication. Invite your schoolmates to join in the fun and crack the quiz! 📄 🔄

